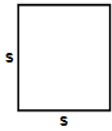





- 1) Find area of square having each side (s) equals 74 cm



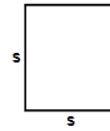
Answer: _____

- 2) Find area of square having each side (s) equals 57 cm



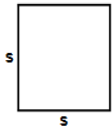
Answer: _____

- 3) Find area of square having each side (s) equals 80 ft




Answer: _____

- 4) Find area of square having each side (s) equals 40 cm



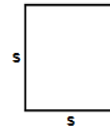
Answer: _____

- 5) Find area of square having each side (s) equals 59 ft



Answer: _____

- 6) Find area of square having each side (s) equals 73 in



Answer: _____

- 7) Find area of square having each side (s) equals 53 in



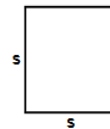
Answer: _____

- 8) Find area of square having each side (s) equals 52 in



Answer: _____

- 9) Find area of square having each side (s) equals 30 m



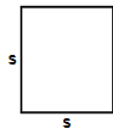
Answer: _____

- 10) Find area of square having each side (s) equals 24 m



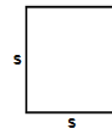
Answer: _____

- 11) Find area of square having each side (s) equals 85 cm



Answer: _____

- 12) Find area of square having each side (s) equals 70 m



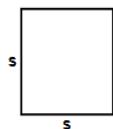
Answer: _____

- 13) Find area of square having each side (s) equals 41 m



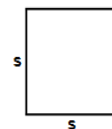
Answer: _____

- 14) Find area of square having each side (s) equals 14 m



Answer: _____

- 15) Find area of square having each side (s) equals 37 cm




Answer: _____

Name: _____

September 13, 2023




16)



Find area of square
having each side (s)
equals 96 in

Answer: _____

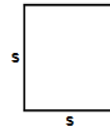
17)



Find area of square
having each side (s)
equals 58 ft

Answer: _____


18)



Find area of square
having each side (s)
equals 61 ft

Answer: _____

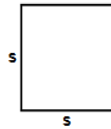
19)



Find area of square
having each side (s)
equals 51 ft

Answer: _____

20)



Find area of square
having each side (s)
equals 69 ft

Answer: _____

Total: ____ / 20

Name: _____

September 13, 2023

Sr: 13092023-3196

MATHS WORKSHEET

GENERATOR

**11-PLUS
SATS
GCSES**



Answers:

- | | | | | | | |
|------------|------------|------------|------------|------------|------------|-----------|
| 1) 5476cm | 2) 3249cm | 3) 6400ft | 4) 1600cm | 5) 3481ft | 6) 5329in | 7) 2809in |
| 8) 2704in | 9) 900m | 10) 576m | 11) 7225cm | 12) 4900m | 13) 1681m | 14) 196m |
| 15) 1369cm | 16) 9216in | 17) 3364ft | 18) 3721ft | 19) 2601ft | 20) 4761ft | |